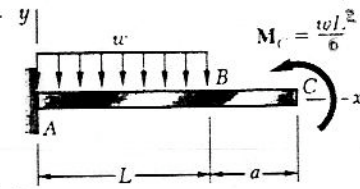
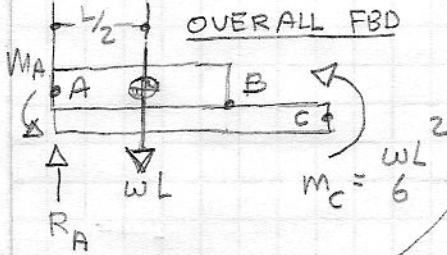


Problem 9.5

9.5 and 9.6 For the cantilever beam and loading shown, determine (a) the equation of the elastic curve for portion AB of the beam, (b) the deflection at B, (c) the slope at B.



- [1] $x=0, y=0$
 [2] $x=0, dy/dx=0$



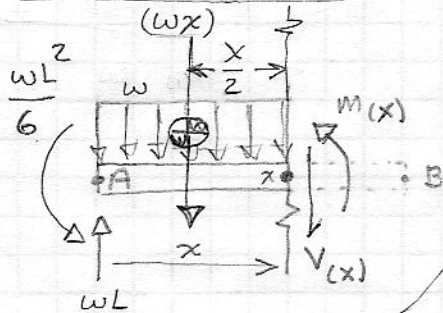
Determine Reactions at A: overall FBD

$$+\uparrow \sum F_y = 0 = R_A - wL \quad ; \quad R_A = wL$$

$$(+\curvearrowright \sum M_A = 0 = +M_A - \frac{1}{2}(wL) + \frac{wL^2}{6} \quad ; \quad M_A = +\frac{wL^2}{3}$$

Determine $M(x)$ in interval AB only

$$(+\curvearrowright \sum M_x = 0 = +M(x) + \frac{x}{2}(wx) - wL \cdot x + \frac{wL^2}{3}$$



$$M(x) = -\frac{wx^2}{2} + wLx - \frac{wL^2}{3}$$

Determine $y(x)$ elastic curve in interval AB

$$EI \frac{d^2 y(x)}{dx^2} = M(x) = -\frac{wx^2}{2} + wLx - \frac{wL^2}{3}$$

integrate

$$EI \frac{dy(x)}{dx} = -\frac{wx^3}{6} + \frac{wLx^2}{2} - \frac{wL^2}{3}x + C_1 = 0$$

Use BC [2], $x=0, dy/dx=0$

$$C_1 = 0$$

Subst.

$$EI \frac{dy(x)}{dx} = -\frac{wx^3}{6} + \frac{wLx^2}{2} - \frac{wL^2}{3}x \quad (1) \text{ slope}$$

integrate

$$EI y(x) = -\frac{wx^4}{24} + \frac{wLx^3}{6} - \frac{wL^2}{6}x^2 + C_2 = 0$$

Use BC [1], $x=0, y=0$

$$C_2 = 0$$

Subst.

$$y(x) = \frac{w}{24EI} (-x^4 + 4Lx^3 - 4L^2x^2) \quad (2) \text{ "deformation" elastic curve}$$

Determine deflection at B $x=L$,
 Subst. $x=L$ in eqn (2)

$$y(x=L) = -\frac{wL^4}{24EI} \text{ deformation at B}$$

Determine slope at B
 Subst. $x=L$ in eqn (1)

$$\left. \frac{dy}{dx} \right|_{x=L} = 0 \text{ slope at B}$$